

Building Number Sense

Two Story Problems



Solve each problem.
Show how you found
your answer.

1 Jill had 4 fish. She got 5 more for her birthday. How many fish did Jill have then? _____


2 Myles had 15 stamps in his collection. He gave 5 of them to his brother. How many stamps did Myles have left? _____

Mixed Review and Test Prep


3 Which group has the same number of objects as keys?



(A)



(B)



(C)



(D)