



Survey Questions and Secret Rules**How Many?**


The chart shows how many students are in class today and how many are not.

Room 110's Attendance	
HERE	NOT HERE
	

- ① How many students are here today? _____
- ② How many students are absent today? _____
- ③ How many students are in the class? _____

Mixed Review and Test Prep

- ④ How many hands and feet in all?



10

(A)

20

(B)

22

(C)

40

(D)