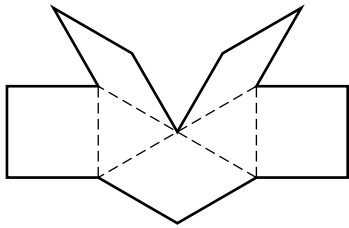


## Quilt Squares and Block Towns

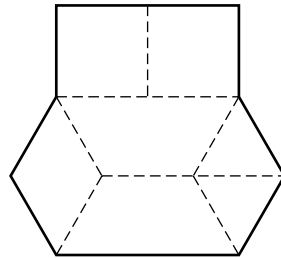
### The Match Game

- Write how many blocks were used in each design.
- Then match each design with the chart that tells how many of each kind were used.

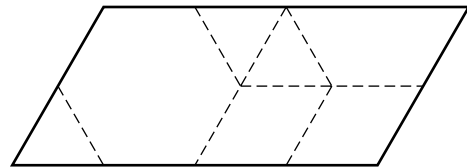
**Design 1** \_\_\_\_\_



**Design 2** \_\_\_\_\_



**Design 3** \_\_\_\_\_



1	
1	
2	
0	
0	
3	

0	
0	
1	
2	
2	
2	

0	
2	
1	
2	
0	
2	