


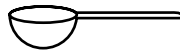

Name _____

Date _____

Bigger, Taller, Heavier, Smaller

Which Holds More?

Circle the container
on the right that
holds more than the
first container.

1**2****3****4****5****6****7**