

What's the Sum?

Write the sum of
the two numbers.

1 5 6 _____	2 10 8 _____	3 3 7 _____
4 4 4 _____	5 2 1 _____	6 9 7 _____
7 8 5 _____	8 3 6 _____	9 6 6 _____

Mixed Review and Test Prep

10 Which block has the **most** sides?



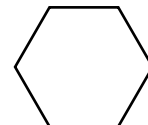
(A)



(B)



(C)



(D)

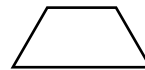
11 Which block has the **fewest** sides?



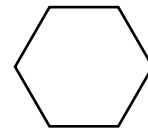
(A)



(B)



(C)



(D)