


**Bigger, Taller, Heavier, Smaller**

# Which Holds the Most?


Put each group of containers in order. Write **1** for the smallest one, **2** for the middle-sized one, and **3** for the biggest one.

**1**


\_\_\_\_\_

\_\_\_\_\_

\_\_\_\_\_

**2**


\_\_\_\_\_

\_\_\_\_\_

\_\_\_\_\_

**3**


\_\_\_\_\_

\_\_\_\_\_


\_\_\_\_\_

**4**


\_\_\_\_\_

\_\_\_\_\_

\_\_\_\_\_

**5**


\_\_\_\_\_

\_\_\_\_\_

\_\_\_\_\_