



How Much Does It Hold?

- 1** Draw a line to match the containers that hold about the same amount.



- 2** Name two other things that you think hold about the same amount.
- _____

Mixed Review and Test Prep

- 3** Which cube train is the shortest?



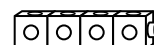
(A)



(B)



(C)



(D)